

Book For  
Railway Recruitment Board



Shape Construction



Visit our websites:

-----  
[www.Couponlal.com](http://www.Couponlal.com)

[www.Myexamportal.com](http://www.Myexamportal.com)

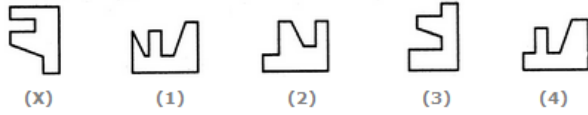
[www.Examlal.com](http://www.Examlal.com)

| [www.Joblal.com](http://www.Joblal.com)

| [www.joinexam.in](http://www.joinexam.in)

| [www.examyoud.com](http://www.examyoud.com)

Q. 1 Select a figure from the given four alternatives which fits exactly into Figure-X to form a complete square.



- [A] 1
- [B] 2
- [C] 3
- [D] 4

Answer Option [D]

Explanation: 


[www.rrb2018.com](http://www.rrb2018.com) | [www.couponlal.com](http://www.couponlal.com) | [www.examlal.com](http://www.examlal.com) | [www.joblal.com](http://www.joblal.com) | [www.examy.com](http://www.examy.com)

Q. 2 Select the alternative which represents three out of the five alternative figures which when fitted into each other would form a complete square.



- [A] 123
- [B] 345
- [C] 245
- [D] 234

Answer Option [D]

Explanation: 

[www.rrb2018.com](http://www.rrb2018.com) | [www.couponlal.com](http://www.couponlal.com) | [www.examlal.com](http://www.examlal.com) | [www.joblal.com](http://www.joblal.com) | [www.examy.com](http://www.examy.com)

Q. 3 Select the alternative which represents three out of the five alternative figures which when fitted into each other would form a complete square.



- [A] 123
- [B] 234
- [C] 124
- [D] 245

Answer Option [C]

Explanation: 

[www.rrb2018.com](http://www.rrb2018.com) | [www.couponlal.com](http://www.couponlal.com) | [www.examlal.com](http://www.examlal.com) | [www.joblal.com](http://www.joblal.com) | [www.examy.com](http://www.examy.com)

Q. 4 Select the alternative which represents three out of the five alternative figures which when fitted into each other would form a complete square.



- [A] 123
- [B] 234
- [C] 345
- [D] 245

Answer Option [C]



[www.rrb2018.com](http://www.rrb2018.com) | [www.couponlal.com](http://www.couponlal.com) | [www.examlal.com](http://www.examlal.com) | [www.joblal.com](http://www.joblal.com) | [www.examy.com](http://www.examy.com)

Q. 5 Select the alternative which represents three out of the five alternative figures which when fitted into each other would form an equilateral triangle.



- [A] 123
- [B] 135
- [C] 245
- [D] 345

Answer Option [B]




[www.rrb2018.com](http://www.rrb2018.com) | [www.couponlal.com](http://www.couponlal.com) | [www.examlal.com](http://www.examlal.com) | [www.joblal.com](http://www.joblal.com) | [www.examy.com](http://www.examy.com)

Q. 6 Select a figure from the given four alternatives which fits exactly into Figure-X to form a complete square.



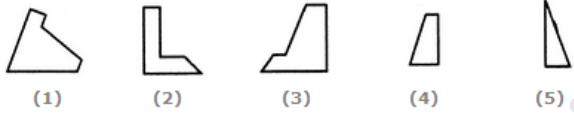
- [A] 1
- [B] 2
- [C] 3
- [D] 4

Answer Option [B]



[www.rrb2018.com](http://www.rrb2018.com) | [www.couponlal.com](http://www.couponlal.com) | [www.examlal.com](http://www.examlal.com) | [www.joblal.com](http://www.joblal.com) | [www.examy.com](http://www.examy.com)

Q. 7 Select the alternative which represents three out of the five alternative figures which when fitted into each other would form a complete square.



- [A] 123
- [B] 124
- [C] 135
- [D] 145

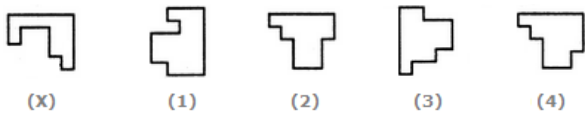
www.joblal.com

Answer Option [D]



[www.rrb2018.com](http://www.rrb2018.com) | [www.couponlal.com](http://www.couponlal.com) | [www.examlal.com](http://www.examlal.com) | [www.joblal.com](http://www.joblal.com) | [www.examy.com](http://www.examy.com)

Q. 8 Select a figure from the given four alternatives which fits exactly into Figure-X to form a complete square.



- [A] 1
- [B] 2
- [C] 3
- [D] 4

www.joblal.com

Answer Option [D]



[www.rrb2018.com](http://www.rrb2018.com) | [www.couponlal.com](http://www.couponlal.com) | [www.examlal.com](http://www.examlal.com) | [www.joblal.com](http://www.joblal.com) | [www.examy.com](http://www.examy.com)

Q. 9 Select a figure from the given four alternatives which fits exactly into Figure-X to form a complete square.



- [A] 1
- [B] 2
- [C] 3
- [D] 4

www.joblal.com

Answer Option [D]



[www.rrb2018.com](http://www.rrb2018.com) | [www.couponlal.com](http://www.couponlal.com) | [www.examlal.com](http://www.examlal.com) | [www.joblal.com](http://www.joblal.com) | [www.examy.com](http://www.examy.com)

Q. 10 Select the alternative which represents three out of the five alternative figures which when fitted into each other would form an equilateral triangle.



- [A] 234
- [B] 123
- [C] 345
- [D] 235

Answer Option [B]



[www.rrb2018.com](http://www.rrb2018.com) | [www.couponlal.com](http://www.couponlal.com) | [www.examlal.com](http://www.examlal.com) | [www.joblal.com](http://www.joblal.com) | [www.examy.com](http://www.examy.com)

Q. 11 Select a figure from the given four alternatives which fits exactly into Figure-X to form a complete square.



- [A] 1
- [B] 2
- [C] 3
- [D] 4

Answer Option [C]



[www.rrb2018.com](http://www.rrb2018.com) | [www.couponlal.com](http://www.couponlal.com) | [www.examlal.com](http://www.examlal.com) | [www.joblal.com](http://www.joblal.com) | [www.examy.com](http://www.examy.com)

Q. 12 Select the alternative which represents three out of the five alternative figures which when fitted into each other would form a complete square.



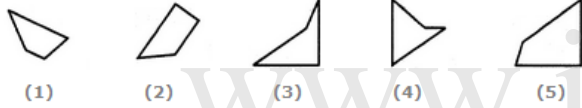
- [A] 145
- [B] 234
- [C] 134
- [D] 235

Answer Option [B]



[www.rrb2018.com](http://www.rrb2018.com) | [www.couponlal.com](http://www.couponlal.com) | [www.examlal.com](http://www.examlal.com) | [www.joblal.com](http://www.joblal.com) | [www.examy.com](http://www.examy.com)

Q. 13 Select the alternative which represents three out of the five alternative figures which when fitted into each other would form a complete square.



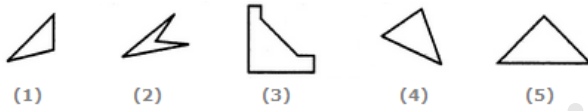
- [A] 123
- [B] 124
- [C] 134
- [D] 345

Answer Option [C]



[www.rrb2018.com](http://www.rrb2018.com) | [www.couponlal.com](http://www.couponlal.com) | [www.examlal.com](http://www.examlal.com) | [www.joblal.com](http://www.joblal.com) | [www.examy.com](http://www.examy.com)

Q. 14 Select the alternative which represents three out of the five alternative figures which when fitted into each other would form a complete square.



- [A] 134
- [B] 145
- [C] 125
- [D] 124

Answer Option [B]



[www.rrb2018.com](http://www.rrb2018.com) | [www.couponlal.com](http://www.couponlal.com) | [www.examlal.com](http://www.examlal.com) | [www.joblal.com](http://www.joblal.com) | [www.examy.com](http://www.examy.com)

Q. 15 Select a figure from the given four alternatives which fits exactly into Figure-X to form a complete square.



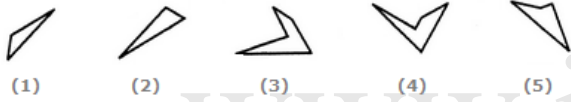
- [A] 1
- [B] 2
- [C] 3
- [D] 4

Answer Option [A]



[www.rrb2018.com](http://www.rrb2018.com) | [www.couponlal.com](http://www.couponlal.com) | [www.examlal.com](http://www.examlal.com) | [www.joblal.com](http://www.joblal.com) | [www.examy.com](http://www.examy.com)

Q. 16 Select the alternative which represents three out of the five alternative figures which when fitted into each other would form an equilateral triangle.



- (1)  
 (2)  
 (3)  
 (4)  
 (5)
- [A] 123  
 [B] 135  
 [C] 234  
 [D] 245

Answer Option [D]



[www.rrb2018.com](http://www.rrb2018.com) | [www.couponlal.com](http://www.couponlal.com) | [www.examlal.com](http://www.examlal.com) | [www.joblal.com](http://www.joblal.com) | [www.examy.com](http://www.examy.com)

Q. 17 Select the alternative which represents three out of the five alternative figures which when fitted into each other would form a complete square.



- (1)  
 (2)  
 (3)  
 (4)  
 (5)
- [A] 124  
 [B] 234  
 [C] 345  
 [D] 235

Answer Option [B]




[www.rrb2018.com](http://www.rrb2018.com) | [www.couponlal.com](http://www.couponlal.com) | [www.examlal.com](http://www.examlal.com) | [www.joblal.com](http://www.joblal.com) | [www.examy.com](http://www.examy.com)

Q. 18 Select the alternative which represents three out of the five alternative figures which when fitted into each other would form a complete square.



- (1)  
 (2)  
 (3)  
 (4)  
 (5)
- [A] 123  
 [B] 234  
 [C] 134  
 [D] 345

Answer Option [D]



[www.rrb2018.com](http://www.rrb2018.com) | [www.couponlal.com](http://www.couponlal.com) | [www.examlal.com](http://www.examlal.com) | [www.joblal.com](http://www.joblal.com) | [www.examy.com](http://www.examy.com)

Q. 19 Select the alternative which represents three out of the five alternative figures which when fitted into each other would form a complete square.



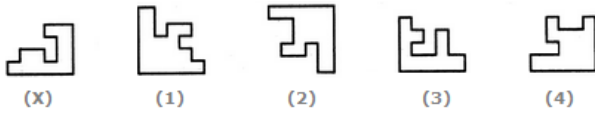
- [A] 124
- [B] 345
- [C] 123
- [D] 135

Answer Option [D]



[www.rrb2018.com](http://www.rrb2018.com) | [www.couponlal.com](http://www.couponlal.com) | [www.examlal.com](http://www.examlal.com) | [www.joblal.com](http://www.joblal.com) | [www.examy.com](http://www.examy.com)

Q. 20 Select a figure from the given four alternatives which fits exactly into Figure-X to form a complete square.



- [A] 1
- [B] 2
- [C] 3
- [D] 4

Answer Option [D]



[www.rrb2018.com](http://www.rrb2018.com) | [www.couponlal.com](http://www.couponlal.com) | [www.examlal.com](http://www.examlal.com) | [www.joblal.com](http://www.joblal.com) | [www.examy.com](http://www.examy.com)

Q. 21 Select the alternative which represents three out of the five alternative figures which when fitted into each other would form a complete square.



- [A] 134
- [B] 345
- [C] 234
- [D] 135

Answer Option [C]



[www.rrb2018.com](http://www.rrb2018.com) | [www.couponlal.com](http://www.couponlal.com) | [www.examlal.com](http://www.examlal.com) | [www.joblal.com](http://www.joblal.com) | [www.examy.com](http://www.examy.com)


Q. 22 Select the alternative which represents three out of the five alternative figures which when fitted into each other would form an equilateral triangle.





- [A] 123
- [B] 234
- [C] 345
- [D] 245

Answer Option [C]



[www.rrb2018.com](http://www.rrb2018.com) | [www.couponlal.com](http://www.couponlal.com) | [www.examlal.com](http://www.examlal.com) | [www.joblal.com](http://www.joblal.com) | [www.examy.com](http://www.examy.com)

Q. 23 Select the alternative which represents three out of the five alternative figures which when fitted into each other would form a complete square.



- [A] 135
- [B] 123
- [C] 145
- [D] 234

Answer Option [A]



[www.rrb2018.com](http://www.rrb2018.com) | [www.couponlal.com](http://www.couponlal.com) | [www.examlal.com](http://www.examlal.com) | [www.joblal.com](http://www.joblal.com) | [www.examy.com](http://www.examy.com)

Q. 24 Select a figure from the given four alternatives which fits exactly into Figure-X to form a complete square.



- [A] 1
- [B] 2
- [C] 3
- [D] 4

Answer Option [B]



[www.rrb2018.com](http://www.rrb2018.com) | [www.couponlal.com](http://www.couponlal.com) | [www.examlal.com](http://www.examlal.com) | [www.joblal.com](http://www.joblal.com) | [www.examy.com](http://www.examy.com)

Q. 25 Select a figure from the given four alternatives which fits exactly into Figure-X to form a complete square.



(x)



(1)



(2)



(3)



(4)

[A] 1

[B] 2

[C] 3

[D] 4

Answer Option [D]

Explanation:



[www.rrb2018.com](http://www.rrb2018.com) | [www.couponlal.com](http://www.couponlal.com) | [www.examlal.com](http://www.examlal.com) | [www.joblal.com](http://www.joblal.com) | [www.examy.com](http://www.examy.com)

Q. 26 Select the alternative which represents three out of the five alternative figures which when fitted into each other would form a complete square.



(1)



(2)



(3)



(4)



(5)

[A] 145

[B] 135

[C] 235

[D] 234

Answer Option [D]

Explanation:



[www.rrb2018.com](http://www.rrb2018.com) | [www.couponlal.com](http://www.couponlal.com) | [www.examlal.com](http://www.examlal.com) | [www.joblal.com](http://www.joblal.com) | [www.examy.com](http://www.examy.com)

Q. 27 Select the alternative which represents three out of the five alternative figures which when fitted into each other would form an equilateral triangle.



(1)



(2)



(3)



(4)



(5)

[A] 234

[B] 134

[C] 345

[D] 245

Answer Option [C]

Explanation:



[www.rrb2018.com](http://www.rrb2018.com) | [www.couponlal.com](http://www.couponlal.com) | [www.examlal.com](http://www.examlal.com) | [www.joblal.com](http://www.joblal.com) | [www.examy.com](http://www.examy.com)

Q. 28 Select a figure from the given four alternatives which fits exactly into Figure-X to form a complete square.



(X)



(1)



(2)



(3)



(4)

- [A] 1
- [B] 2
- [C] 3
- [D] 4

Answer Option [C]

Explanation:



[www.rrb2018.com](http://www.rrb2018.com) | [www.couponlal.com](http://www.couponlal.com) | [www.examlal.com](http://www.examlal.com) | [www.joblal.com](http://www.joblal.com) | [www.examy.com](http://www.examy.com)

Q. 29 Select a figure from the given four alternatives which fits exactly into Figure-X to form a complete square.



(X)



(1)



(2)



(3)



(4)

- [A] 1
- [B] 2
- [C] 3
- [D] 4

Answer Option [D]

Explanation:



[www.rrb2018.com](http://www.rrb2018.com) | [www.couponlal.com](http://www.couponlal.com) | [www.examlal.com](http://www.examlal.com) | [www.joblal.com](http://www.joblal.com) | [www.examy.com](http://www.examy.com)

Q. 30 Select the alternative which represents three out of the five alternative figures which when fitted into each other would form a complete square.



(1)



(2)



(3)



(4)



(5)

- [A] 134
- [B] 124
- [C] 234
- [D] 345

Answer Option [A]

Explanation:



[www.rrb2018.com](http://www.rrb2018.com) | [www.couponlal.com](http://www.couponlal.com) | [www.examlal.com](http://www.examlal.com) | [www.joblal.com](http://www.joblal.com) | [www.examy.com](http://www.examy.com)

Q. 31 Select a figure from the given four alternatives which fits exactly into Figure-X to form a complete square.



(X)



(1)



(2)



(3)



(4)

[A] 1

[B] 2

[C] 3

[D] 4

Answer Option [A]

Explanation:



[www.rrb2018.com](http://www.rrb2018.com) | [www.couponlal.com](http://www.couponlal.com) | [www.examlal.com](http://www.examlal.com) | [www.joblal.com](http://www.joblal.com) | [www.examy.com](http://www.examy.com)

Q. 32 Select a figure from the given four alternatives which fits exactly into Figure-X to form a complete square.



(X)



(1)



(2)



(3)



(4)

[A] 1

[B] 2

[C] 3

[D] 4

Answer Option [C]

Explanation:



[www.rrb2018.com](http://www.rrb2018.com) | [www.couponlal.com](http://www.couponlal.com) | [www.examlal.com](http://www.examlal.com) | [www.joblal.com](http://www.joblal.com) | [www.examy.com](http://www.examy.com)

Q. 33 Select the alternative which represents three out of the five alternative figures which when fitted into each other would form a complete square.



(1)



(2)



(3)



(4)



(5)

[A] 123

[B] 235

[C] 245

[D] 145

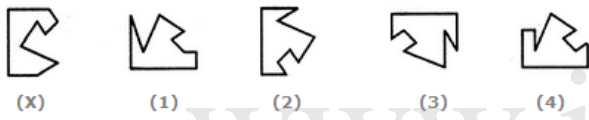
Answer Option [C]

Explanation:



[www.rrb2018.com](http://www.rrb2018.com) | [www.couponlal.com](http://www.couponlal.com) | [www.examlal.com](http://www.examlal.com) | [www.joblal.com](http://www.joblal.com) | [www.examy.com](http://www.examy.com)

Q. 34 Select a figure from the given four alternatives which fits exactly into Figure-X to form a complete square.



(X)

(1)

(2)

(3)

(4)

- [A] 1
- [B] 2
- [C] 3
- [D] 4

Answer Option [B]

Explanation:



[www.rrb2018.com](http://www.rrb2018.com) | [www.couponlal.com](http://www.couponlal.com) | [www.examlal.com](http://www.examlal.com) | [www.joblal.com](http://www.joblal.com) | [www.examy.com](http://www.examy.com)

Q. 35 Select a figure from the given four alternatives which fits exactly into Figure-X to form a complete square.



(X)

(1)

(2)

(3)

(4)

- [A] 1
- [B] 2
- [C] 3
- [D] 4

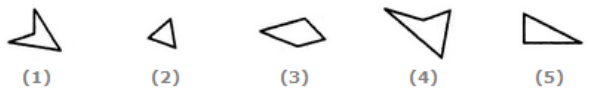
Answer Option [C]

Explanation:



[www.rrb2018.com](http://www.rrb2018.com) | [www.couponlal.com](http://www.couponlal.com) | [www.examlal.com](http://www.examlal.com) | [www.joblal.com](http://www.joblal.com) | [www.examy.com](http://www.examy.com)

Q. 36 Select the alternative which represents three out of the five alternative figures which when fitted into each other would form an equilateral triangle.



(1)

(2)

(3)

(4)

(5)

- [A] 124
- [B] 234
- [C] 245
- [D] 345

Answer Option [B]

Explanation:



[www.rrb2018.com](http://www.rrb2018.com) | [www.couponlal.com](http://www.couponlal.com) | [www.examlal.com](http://www.examlal.com) | [www.joblal.com](http://www.joblal.com) | [www.examy.com](http://www.examy.com)

Q. 37 Select the alternative which represents three out of the five alternative figures which when fitted into each other would form a complete square.



(1)



(2)



(3)



(4)



(5)

[A] 123

[B] 134

[C] 235

[D] 345

Answer Option [B]

Explanation:



[www.rrb2018.com](http://www.rrb2018.com) | [www.couponlal.com](http://www.couponlal.com) | [www.examlal.com](http://www.examlal.com) | [www.joblal.com](http://www.joblal.com) | [www.examy.com](http://www.examy.com)

Q. 38 Select the alternative which represents three out of the five alternative figures which when fitted into each other would form an equilateral triangle.



(1)



(2)



(3)



(4)



(5)

[A] 124

[B] 135

[C] 134

[D] 345

Answer Option [B]

Explanation:



[www.rrb2018.com](http://www.rrb2018.com) | [www.couponlal.com](http://www.couponlal.com) | [www.examlal.com](http://www.examlal.com) | [www.joblal.com](http://www.joblal.com) | [www.examy.com](http://www.examy.com)

Q. 39 Select the alternative which represents three out of the five alternative figures which when fitted into each other would form a complete square.



(1)



(2)



(3)



(4)



(5)

[A] 145

[B] 245

[C] 123

[D] 234

Answer Option [B]

Explanation:



[www.rrb2018.com](http://www.rrb2018.com) | [www.couponlal.com](http://www.couponlal.com) | [www.examlal.com](http://www.examlal.com) | [www.joblal.com](http://www.joblal.com) | [www.examy.com](http://www.examy.com)

Q. 40 Select a figure from the given four alternatives which fits exactly into Figure-X to form a complete square.



(X)



(1)



(2)



(3)



(4)

[A] 1

[B] 2

[C] 3

[D] 4

www.joblall.com

Answer Option [B]

Explanation:



[www.rrb2018.com](http://www.rrb2018.com) | [www.couponlal.com](http://www.couponlal.com) | [www.examlal.com](http://www.examlal.com) | [www.joblall.com](http://www.joblall.com) | [www.examy.com](http://www.examy.com)

Q. 41 Select the alternative which represents three out of the five alternative figures which when fitted into each other would form a complete square.



(1)



(2)



(3)



(4)



(5)

[A] 124

[B] 125

[C] 234

[D] 245

www.joblall.com

Answer Option [B]

Explanation:



[www.rrb2018.com](http://www.rrb2018.com) | [www.couponlal.com](http://www.couponlal.com) | [www.examlal.com](http://www.examlal.com) | [www.joblall.com](http://www.joblall.com) | [www.examy.com](http://www.examy.com)

Q. 42 Select the alternative which represents three out of the five alternative figures which when fitted into each other would form a complete square.



(1)



(2)



(3)



(4)



(5)

[A] 123

[B] 134

[C] 135

[D] 345

www.joblall.com

Answer Option [C]

Explanation:



[www.rrb2018.com](http://www.rrb2018.com) | [www.couponlal.com](http://www.couponlal.com) | [www.examlal.com](http://www.examlal.com) | [www.joblall.com](http://www.joblall.com) | [www.examy.com](http://www.examy.com)

Q. 43 Select the alternative which represents three out of the five alternative figures which when fitted into each other would

form a complete square.



- [A] 145
- [B] 234
- [C] 245
- [D] 135

Answer Option [D]



[www.rrb2018.com](http://www.rrb2018.com) | [www.couponlal.com](http://www.couponlal.com) | [www.examlal.com](http://www.examlal.com) | [www.joblal.com](http://www.joblal.com) | [www.examy.com](http://www.examy.com)

Q. 44 Select a figure from the given four alternatives which fits exactly into Figure-X to form a complete square.



- [A] 1
- [B] 2
- [C] 3
- [D] 4

Answer Option [D]




[www.rrb2018.com](http://www.rrb2018.com) | [www.couponlal.com](http://www.couponlal.com) | [www.examlal.com](http://www.examlal.com) | [www.joblal.com](http://www.joblal.com) | [www.examy.com](http://www.examy.com)

Q. 45 Select the alternative which represents three out of the five alternative figures which when fitted into each other would form an equilateral triangle.



- [A] 125
- [B] 235
- [C] 145
- [D] 245

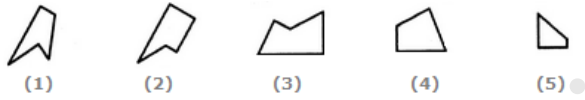
Answer Option [D]



[www.rrb2018.com](http://www.rrb2018.com) | [www.couponlal.com](http://www.couponlal.com) | [www.examlal.com](http://www.examlal.com) | [www.joblal.com](http://www.joblal.com) | [www.examy.com](http://www.examy.com)

Q. 46 Select the alternative which represents three out of the five alternative figures which when fitted into each other would form a complete square.





- [A] 123
- [B] 134
- [C] 135
- [D] 145

www.joblal.com

Answer Option [B]



[www.rrb2018.com](http://www.rrb2018.com) | [www.couponlal.com](http://www.couponlal.com) | [www.examlal.com](http://www.examlal.com) | [www.joblal.com](http://www.joblal.com) | [www.examy.com](http://www.examy.com)

Q. 47 Select the alternative which represents three out of the five alternative figures which when fitted into each other would form an equilateral triangle.



- [A] 135
- [B] 124
- [C] 245
- [D] 345

www.joblal.com

Answer Option [A]



[www.rrb2018.com](http://www.rrb2018.com) | [www.couponlal.com](http://www.couponlal.com) | [www.examlal.com](http://www.examlal.com) | [www.joblal.com](http://www.joblal.com) | [www.examy.com](http://www.examy.com)

Q. 48 Select the alternative which represents three out of the five alternative figures which when fitted into each other would form a complete square.



- [A] 123
- [B] 125
- [C] 234
- [D] 245

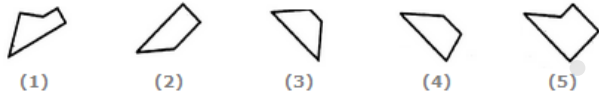
www.joblal.com

Answer Option [C]



[www.rrb2018.com](http://www.rrb2018.com) | [www.couponlal.com](http://www.couponlal.com) | [www.examlal.com](http://www.examlal.com) | [www.joblal.com](http://www.joblal.com) | [www.examy.com](http://www.examy.com)

Q. 49 Select the alternative which represents three out of the five alternative figures which when fitted into each other would form a complete square.



- [A] 123
- [B] 234
- [C] 134
- [D] 235

Answer Option [D]



[www.rrb2018.com](http://www.rrb2018.com) | [www.couponlal.com](http://www.couponlal.com) | [www.examlal.com](http://www.examlal.com) | [www.joblal.com](http://www.joblal.com) | [www.examy.com](http://www.examy.com)

Q. 50 Select a figure from the given four alternatives which fits exactly into Figure-X to form a complete square.



- [A] 1
- [B] 2
- [C] 3
- [D] 4

Answer Option [D]



[www.rrb2018.com](http://www.rrb2018.com) | [www.couponlal.com](http://www.couponlal.com) | [www.examlal.com](http://www.examlal.com) | [www.joblal.com](http://www.joblal.com) | [www.examy.com](http://www.examy.com)

Q. 51 Select the alternative which represents three out of the five alternative figures which when fitted into each other would form a complete square.



- [A] 124
- [B] 235
- [C] 134
- [D] 245

Answer Option [B]



[www.rrb2018.com](http://www.rrb2018.com) | [www.couponlal.com](http://www.couponlal.com) | [www.examlal.com](http://www.examlal.com) | [www.joblal.com](http://www.joblal.com) | [www.examy.com](http://www.examy.com)

Q. 52 Select the alternative which represents three out of the five alternative figures which when fitted into each other would form an equilateral triangle.



- [A] 135
- [B] 124
- [C] 245
- [D] 345

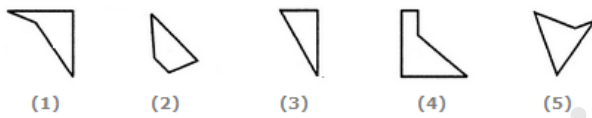
www.joblal.com

Answer Option [D]



[www.rrb2018.com](http://www.rrb2018.com) | [www.couponlal.com](http://www.couponlal.com) | [www.examlal.com](http://www.examlal.com) | [www.joblal.com](http://www.joblal.com) | [www.examy.com](http://www.examy.com)

Q. 53 Select the alternative which represents three out of the five alternative figures which when fitted into each other would form a complete square.



- [A] 125
- [B] 123
- [C] 235
- [D] 234

www.joblal.com

Answer Option [A]



[www.rrb2018.com](http://www.rrb2018.com) | [www.couponlal.com](http://www.couponlal.com) | [www.examlal.com](http://www.examlal.com) | [www.joblal.com](http://www.joblal.com) | [www.examy.com](http://www.examy.com)

Q. 54 Select the alternative which represents three out of the five alternative figures which when fitted into each other would form a complete square.



- [A] 123
- [B] 124
- [C] 125
- [D] 235

www.joblal.com

Answer Option [A]



[www.rrb2018.com](http://www.rrb2018.com) | [www.couponlal.com](http://www.couponlal.com) | [www.examlal.com](http://www.examlal.com) | [www.joblal.com](http://www.joblal.com) | [www.examy.com](http://www.examy.com)

Q. 55 Select a figure from the given four alternatives which fits exactly into Figure-X to form a complete square.



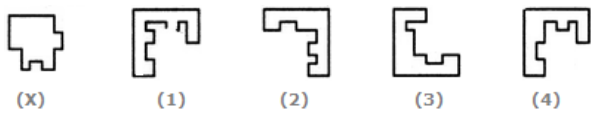
- [A] 1
- [B] 2
- [C] 3
- [D] 4

Answer Option [B]

Explanation: 


[www.rrb2018.com](http://www.rrb2018.com) | [www.couponlal.com](http://www.couponlal.com) | [www.examlal.com](http://www.examlal.com) | [www.joblal.com](http://www.joblal.com) | [www.examy.com](http://www.examy.com)

Q. 56 Select a figure from the given four alternatives which fits exactly into Figure-X to form a complete square.



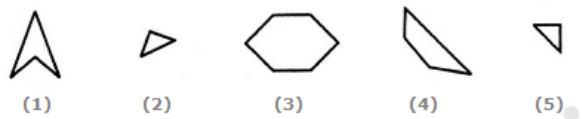
- [A] 1
- [B] 2
- [C] 3
- [D] 4

Answer Option [D]

Explanation: 

[www.rrb2018.com](http://www.rrb2018.com) | [www.couponlal.com](http://www.couponlal.com) | [www.examlal.com](http://www.examlal.com) | [www.joblal.com](http://www.joblal.com) | [www.examy.com](http://www.examy.com)

Q. 57 Select the alternative which represents three out of the five alternative figures which when fitted into each other would form a complete square.



- [A] 124
- [B] 234
- [C] 345
- [D] 235

Answer Option [D]

Explanation: 

[www.rrb2018.com](http://www.rrb2018.com) | [www.couponlal.com](http://www.couponlal.com) | [www.examlal.com](http://www.examlal.com) | [www.joblal.com](http://www.joblal.com) | [www.examy.com](http://www.examy.com)